

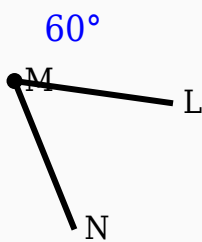
60° Angle Worksheet - Solved

Question 1

60° is smaller than 90°.

Question 2

Observe the figure and identify the angle.

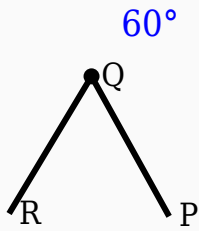


Question 3

60° is an _____ angle.

Question 4

Identify the vertex in the given figure.



Question 5

60° is supplementary to 120° .

Question 6

Which instrument is mainly used to draw arcs?

- A. Compass
- B. Eraser
- C. Divider
- D. Scale

Question 7

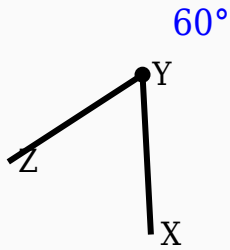
$60^\circ + \underline{\hspace{1cm}}^\circ = 180^\circ$.

Question 8

60° is an obtuse angle.

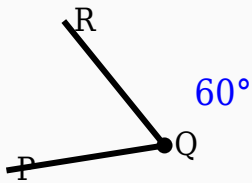
Question 9

Identify the vertex in the given figure.



Question 10

Identify the vertex in the given figure.



Answer Key

Question	Answer
----------	--------

1	True
2	60°
3	acute
4	Middle labeled point
5	True
6	Compass
7	120
8	False
9	Middle labeled point
10	Middle labeled point