

60° Angle Worksheet - Solved

Question 1

Which instrument is used to measure angles?

- A. Scale
- B. Compass
- C. Divider
- D. Protractor

Question 2

60° is smaller than 90°.

Question 3

Half of 60° is _____°.

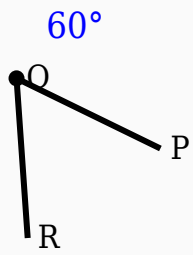
Question 4

Which type of angle is 60°?

- A. Acute
- B. Right
- C. Reflex
- D. Acute

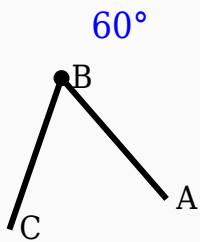
Question 5

Identify the vertex in the given figure.



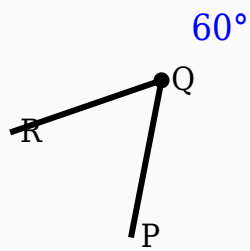
Question 6

Identify the vertex in the given figure.



Question 7

Construct the shown angle using ruler and compass.



Question 8

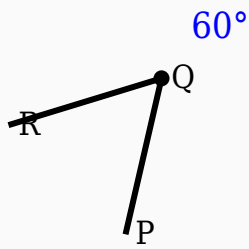
60° is greater than 180° .

Question 9

60° is greater than _____°.

Question 10

Construct the shown angle using ruler and compass.



Answer Key

Question	Answer
1	Protractor
2	True
3	30
4	Acute
5	Middle labeled point
6	Middle labeled point
7	60° constructed
8	False
9	90
10	60° constructed