

90° Angle Worksheet - Solved

Question 1

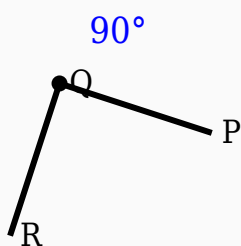
90° is supplementary to 90°.

Question 2

90° + _____° = 180°.

Question 3

Observe the figure and identify the angle.

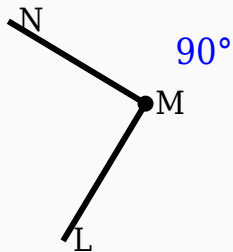


Question 4

Half of 90° is _____°.

Question 5

Observe the figure and identify the angle.



Question 6

The supplement of 90° is _____ $^\circ$.

Question 7

90° is smaller than 90° .

Question 8

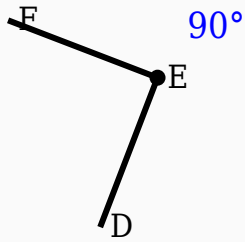
90° is a right angle.

Question 9

90° is an acute angle.

Question 10

Identify the vertex in the given figure.



Answer Key

| Question | Answer |
|----------|----------------------|
| 1 | True |
| 2 | 90 |
| 3 | 90° |
| 4 | 45 |
| 5 | 90° |
| 6 | 90 |
| 7 | False |
| 8 | True |
| 9 | False |
| 10 | Middle labeled point |