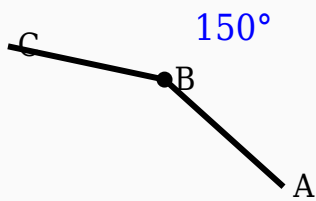


# 150° Angle Worksheet - Solved

## Question 1

Identify the vertex in the given figure.



## Question 2

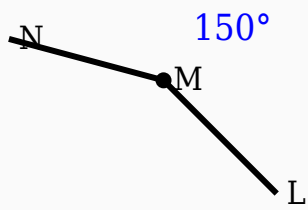
150° is smaller than 90°.

## Question 3

150° + \_\_\_\_\_° = 180°.

## Question 4

Observe the figure and identify the angle.



### Question 5

$150^\circ$  is supplementary to  $30^\circ$ .

### Question 6

$150^\circ$  is an acute angle.

### Question 7

Half of  $150^\circ$  is \_\_\_\_\_ $^\circ$ .

### Question 8

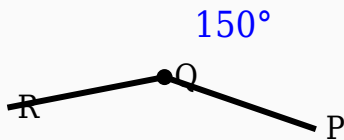
$150^\circ$  is greater than  $180^\circ$ .

## Question 9

$150^\circ$  is greater than \_\_\_\_°.

## Question 10

Observe the figure and identify the angle.



## Answer Key

Question	Answer
1	Middle labeled point
2	False
3	30
4	$150^\circ$
5	True
6	False
7	75
8	False

9	90
10	150°