

150° Angle Worksheet - Solved

Question 1

150° is an obtuse angle.

Question 2

Half of 150° is _____°.

Question 3

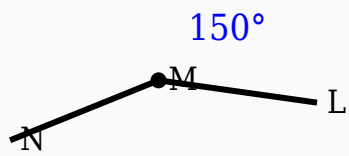
150° is an _____ angle.

Question 4

150° is greater than _____°.

Question 5

Observe the figure and identify the angle.



Question 6

150° is smaller than 90°.

Question 7

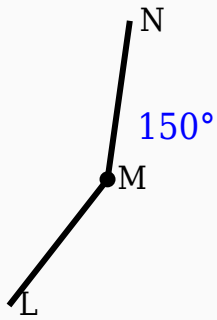
150° is greater than 180°.

Question 8

150° + _____° = 180°.

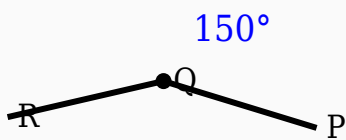
Question 9

Observe the figure and identify the angle.



Question 10

Identify the vertex in the given figure.



Answer Key

Question	Answer
1	True
2	75
3	obtuse

4	90
5	150°
6	False
7	False
8	30
9	150°
10	Middle labeled point