

135° Angle Worksheet - Solved

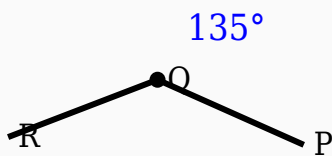
Question 1

Which angle is supplementary to 135°?

- A. 60°
- B. 90°
- C. 45°
- D. 45°

Question 2

Observe the figure and identify the angle.



Question 3

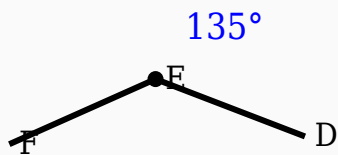
135° is a obtuse angle.

Question 4

135° is an obtuse angle.

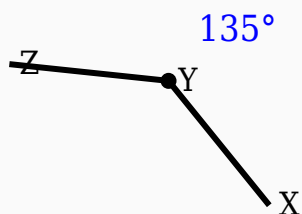
Question 5

Construct the shown angle using ruler and compass.



Question 6

Construct the shown angle using ruler and compass.



Question 7

135° is greater than ____°.

Question 8

Which instrument is used to measure angles?

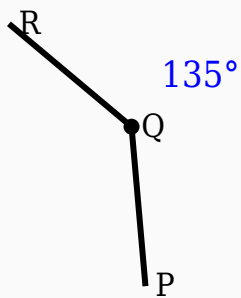
- A. Protractor
- B. Divider
- C. Scale
- D. Compass

Question 9

135° is an ____ angle.

Question 10

Observe the figure and identify the angle.



Answer Key

Question	Answer
1	45°
2	135°
3	True
4	True
5	135° constructed
6	135° constructed
7	90
8	Protractor
9	obtuse
10	135°