

135° Angle Worksheet - Solved

Question 1

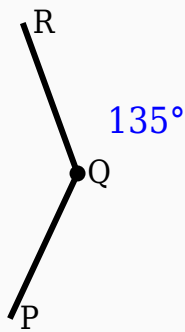
135° is an _____ angle.

Question 2

135° is an obtuse angle.

Question 3

Construct the shown angle using ruler and compass.



Question 4

Which type of angle is 135°?

- A. Reflex
- B. Obtuse
- C. Acute

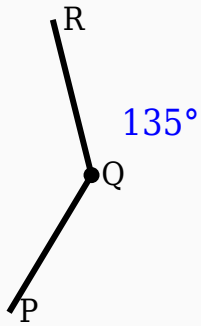
D. Right

Question 5

The supplement of 135° is _____ $^\circ$.

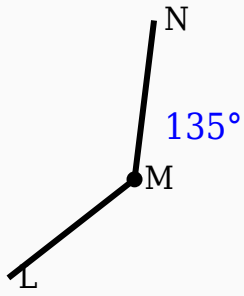
Question 6

Construct the shown angle using ruler and compass.



Question 7

Construct the shown angle using ruler and compass.



Question 8

135° is supplementary to 45°.

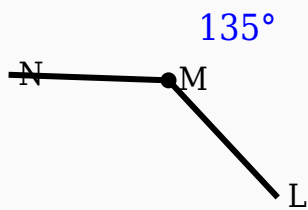
Question 9

Which instrument is used to measure angles?

- A. Scale
- B. Divider
- C. Compass
- D. Protractor

Question 10

Construct the shown angle using ruler and compass.



Answer Key

Question	Answer
1	obtuse
2	True
3	135° constructed
4	Obtuse
5	45
6	135° constructed
7	135° constructed
8	True
9	Protractor
10	135° constructed