

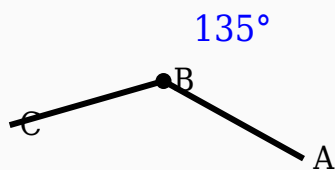
135° Angle Worksheet - Solved

Question 1

135° is greater than 180°.

Question 2

Observe the figure and identify the angle.



Question 3

The supplement of 135° is _____°.

Question 4

135° is smaller than 90°.

Question 5

135° is supplementary to 45° .

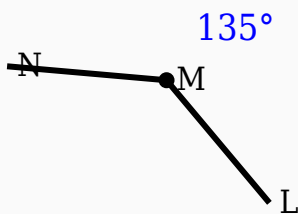
Question 6

Which angle is supplementary to 135° ?

- A. 60°
- B. 45°
- C. 90°
- D. 45°

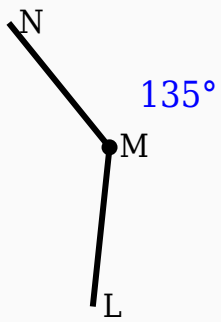
Question 7

Identify the vertex in the given figure.



Question 8

Identify the vertex in the given figure.

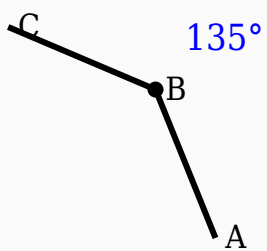


Question 9

135° is an acute angle.

Question 10

Observe the figure and identify the angle.



Answer Key

Question	Answer
1	False
2	135°
3	45
4	False
5	True
6	45°
7	Middle labeled point
8	Middle labeled point
9	False
10	135°