

135° Angle Worksheet - Solved

Question 1

Which instrument is used to measure angles?

- A. Compass
- B. Scale
- C. Protractor
- D. Divider

Question 2

The supplement of 135° is _____°.

Question 3

Which type of angle is 135°?

- A. Obtuse
- B. Acute
- C. Reflex
- D. Right

Question 4

Which angle is supplementary to 135°?

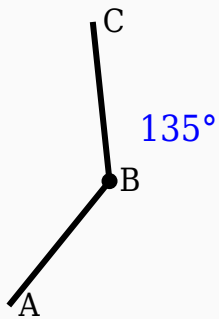
- A. 45°
- B. 90°
- C. 60°
- D. 45°

Question 5

135° is greater than ____°.

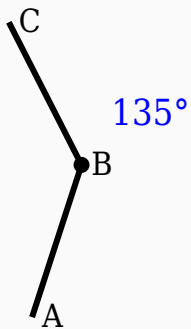
Question 6

Construct the shown angle using ruler and compass.



Question 7

Construct the shown angle using ruler and compass.



Question 8

135° is an acute angle.

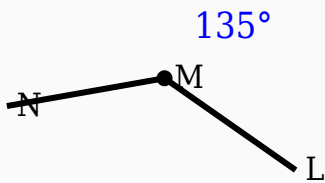
Question 9

Which instrument is mainly used to draw arcs?

- A. Divider
- B. Eraser
- C. Scale
- D. Compass

Question 10

Construct the shown angle using ruler and compass.



Answer Key

Question	Answer
----------	--------

1	Protractor
2	45
3	Obtuse
4	45°
5	90
6	135° constructed
7	135° constructed
8	False
9	Compass
10	135° constructed