

45° Angle Worksheet - Solved

Question 1

Which angle is supplementary to 45°?

- A. 45°
- B. 90°
- C. 60°
- D. 135°

Question 2

45° is greater than ____°.

Question 3

45° is an ____ angle.

Question 4

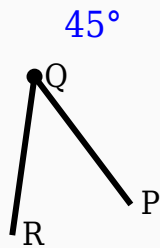
45° is a acute angle.

Question 5

45° is an obtuse angle.

Question 6

Observe the figure and identify the angle.



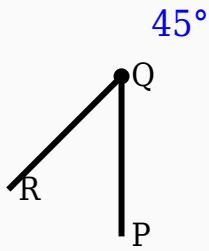
Question 7

Which instrument is mainly used to draw arcs?

- A. Compass
- B. Scale
- C. Divider
- D. Eraser

Question 8

Identify the vertex in the given figure.



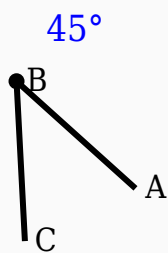
Question 9

Which instrument is used to measure angles?

- A. Divider
- B. Compass
- C. Scale
- D. Protractor

Question 10

Identify the vertex in the given figure.



Answer Key

Question	Answer
1	135°
2	90
3	acute
4	True
5	False
6	45°
7	Compass
8	Middle labeled point
9	Protractor
10	Middle labeled point