

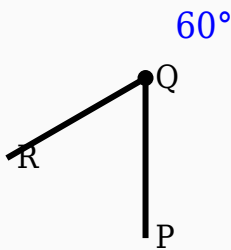
60° Angle Worksheet - Solved

Question 1

$$60^\circ + \underline{\quad}^\circ = 180^\circ.$$

Question 2

Construct the shown angle using ruler and compass.



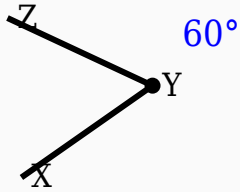
Question 3

Which instrument is mainly used to draw arcs?

- A. Scale
- B. Eraser
- C. Compass
- D. Divider

Question 4

Identify the vertex in the given figure.



Question 5

Which instrument is used to measure angles?

- A. Scale
- B. Protractor
- C. Divider
- D. Compass

Question 6

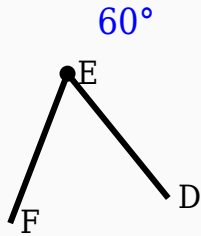
The supplement of 60° is _____ $^\circ$.

Question 7

60° is greater than _____ $^\circ$.

Question 8

Construct the shown angle using ruler and compass.



Question 9

60° is greater than 180°.

Question 10

Which type of angle is 60°?

- A. Right
- B. Reflex
- C. Acute
- D. Acute

Answer Key

Question	Answer
1	120

2	60° constructed
3	Compass
4	Middle labeled point
5	Protractor
6	120
7	90
8	60° constructed
9	False
10	Acute